

Name \_\_\_\_\_

# My Homework

Lesson 1

Tally Charts

## Homework Helper

Need help? [connectED.mcgraw-hill.com](http://connectED.mcgraw-hill.com)

A tally chart shows a mark for each vote in a survey. | means 1 vote. |||| means 5 votes.

Favorite Riding Toy		
Riding Toy	Tally	Total
Scooter		2
Bicycle		7
Skateboard		5

How many votes did scooter get?

2 votes




## Practice

Write the totals. Use the chart to answer the questions.

Favorite Activity		
Activity	Tally	Total
Art		
Music		
Sports		

- How many more votes did music get than art? \_\_\_\_\_
- How many people were surveyed? \_\_\_\_\_

Write the totals. Use the chart to answer the questions.

My Favorite Season		
Season	Tally	Total
 Summer		
 Fall		
 Spring		

- How many people like fall? \_\_\_\_\_
- How many more people like summer than spring? \_\_\_\_\_
- Do 7 people like summer or fall? \_\_\_\_\_
- How many people were surveyed? \_\_\_\_\_

## Vocabulary Check

Complete each sentence.

**tally chart**

**survey**

- You can collect data by taking a \_\_\_\_\_.
- A \_\_\_\_\_ shows data using tally marks.



**Math at Home** Ask your child to make a tally chart to show which sport your family likes better: football or baseball.