







## Check My Progress *(Lessons 1 through 4)*

The students voted for their favorite fruit. Amie made a tally chart to show how the students voted.

Favorite Fruit		
Fruit	Tally	Total
 Grapes		5
 Apples		4
 Oranges		6

1. Use the tally chart to make a picture graph.

Favorite Fruit										
 Grapes										
 Apples										
 Oranges										

2. Did more students choose apples or oranges?  
\_\_\_\_\_

3. How many students chose grapes? \_\_\_\_\_

4. Did fewer students choose grapes or apples?  
\_\_\_\_\_

5. How many more students chose oranges than grapes? \_\_\_\_\_

6. How many students were surveyed? \_\_\_\_\_