


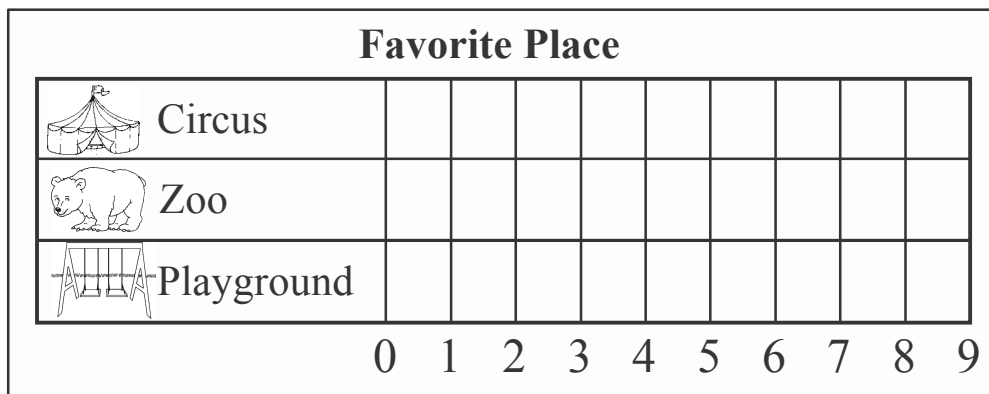


Chapter Test, Form 3A

Use the tally chart to answer the questions.

Favorite Place		
Place	Tally	Total
 Circus		
 Zoo		
 Playground		

- How many people chose the circus? _____ people
- How many more people chose the zoo than the playground? _____ people
- How many people took the survey? _____ people
- Use the tally chart to make a bar graph. Color in the bar graph to show how many voted for each place.



- Which place got the most votes?



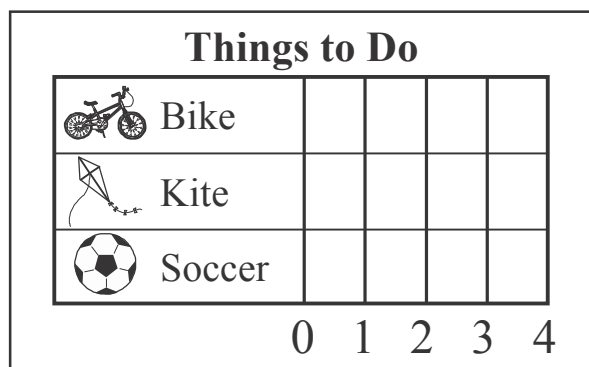
Name _____

Chapter Test, Form 3A *(continued)*

6. Complete the graph.

Min likes  and . Ben likes .



Jade likes . Ella likes  and .



7. How many students voted? _____

8. Which got the most votes? _____

9. Which got the fewest votes?

10. How many fewer votes did  get than ? _____

