

Name

My Homework

Lesson 4

Compare Shapes

Homework Helper




Need help? connectED.mcgraw-hill.com

You can compare and sort two-dimensional shapes.



shapes that have
4 straight sides




shapes that are closed
and have 3 vertices


Practice

Circle the shapes described.


1. shapes with 0 vertices




2. shapes with 3 sides



3. shapes with more than
2 sides



4. shapes that are closed




Circle the shapes described.

5. shapes with more than 2 straight sides



6. shapes with less than 4 vertices



7. Draw a shape that has 4 vertices and 2 pair of sides that are different lengths.

Test Practice

8. Which shape has 3 sides and 3 vertices?

circle



square



triangle



rectangle



Math at Home While driving, look at road signs together. Ask your child to name and describe the shapes he or she sees.