

Name

My Homework

Lesson 8

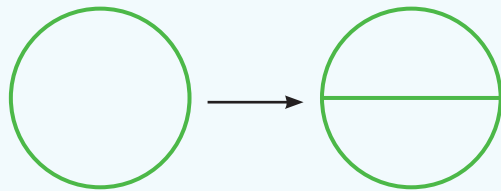
Equal Parts

Homework Helper

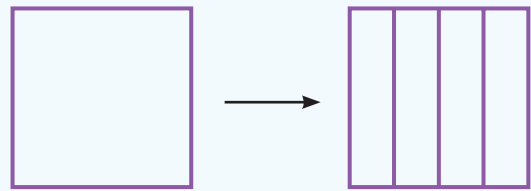


Need help? connectED.mcgraw-hill.com

A whole can be separated into equal parts.
Equal parts of the whole are the same size.



2 equal parts



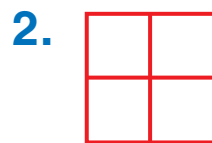
4 equal parts

Practice

Write how many equal parts.




_____ equal parts



_____ equal parts




_____ equal parts



_____ equal parts

Draw lines to show equal parts.


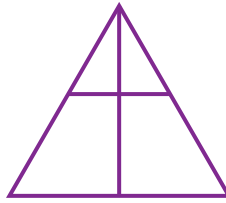
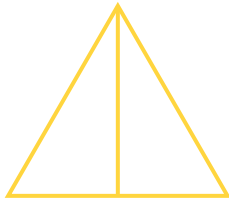
5. 4 equal parts



6. 2 equal parts



7. Circle the shape that shows equal parts.



8. Liz and Koto cut one sheet of paper one time.
Each gets an equal share of the whole.
How many equal parts do they have?


_____ equal parts

Vocabulary Check

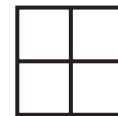
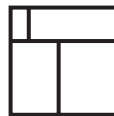


Circle the correct answers.

9. whole



10. equal parts



Math at Home Have your child separate a piece of toast into 2 and then 4 equal parts.